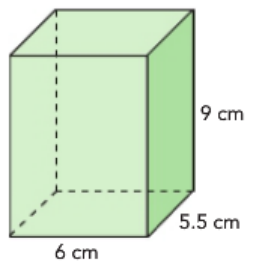


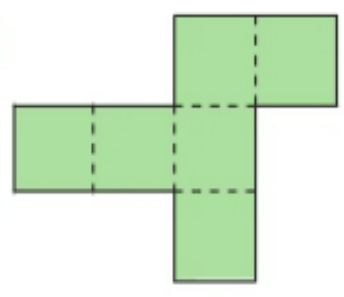
Please complete your study guide in place of your homework -or- with your homework. If you do both, you can roll a total of 3 times!

1. Please find the area of a cube with a side length of $4\frac{1}{2}$ feet.

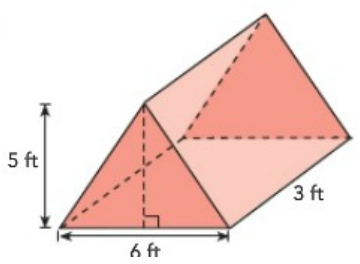
2. Please find the Volume.



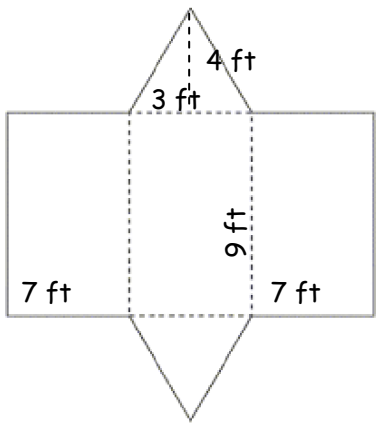
3. Please find the Surface Area.



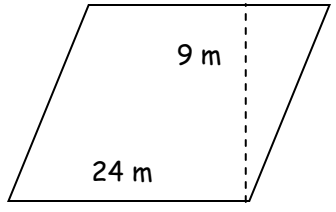
4. Please find the Volume.



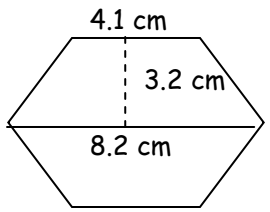
5. Please find the Surface Area.



6. Please find the Area.

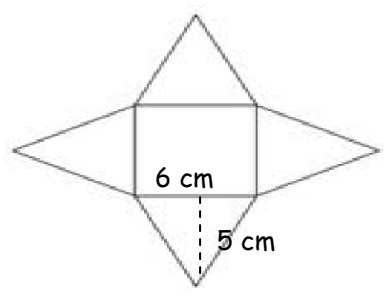


7. Please find the Area.



8. Please find the Volume of a cube with a side length of 6 in.

9. Please find the Surface Area.



10. What are the formulas for the area of a Triangle?

Rectangle?

Parallelogram?

Trapezoid?

11. What are the formulas for the volume of

Rectangular prisms?

All prisms?

12. What 4 step process do you use to find Surface Area?

1.

2.

3.

4.